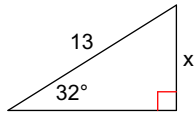


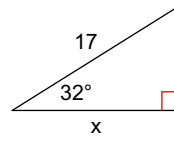
## Finding a Missing Side using Trig #2

Find the missing side. Round to the nearest tenth.

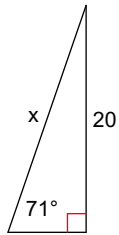
1)



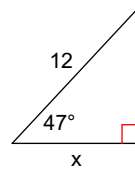
2)



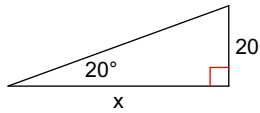
3)



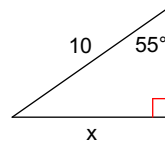
4)



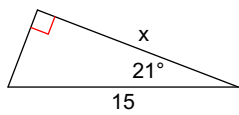
5)



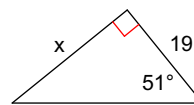
6)



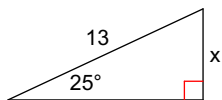
7)



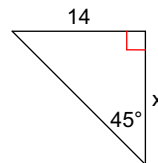
8)



9)



10)



## Answers to Finding a Missing Side using Trig #2

1) 6.9  
5) 54.9  
9) 5.5

2) 14.4  
6) 8.2  
10) 14.0

3) 21.2  
7) 14.0

4) 8.2  
8) 23.5