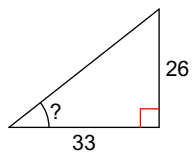


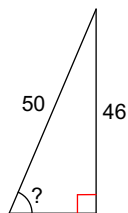
Finding a Missing Angle Using Trig #2

Find the measure of the indicated angle to the nearest degree.

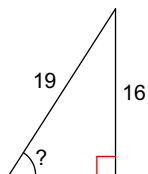
1)



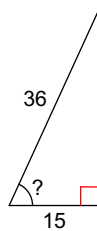
2)



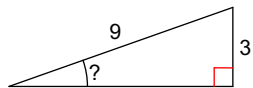
3)



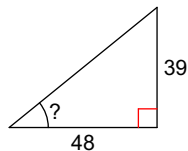
4)



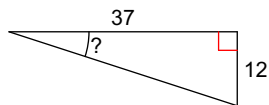
5)



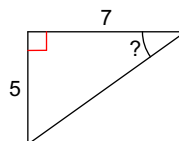
6)



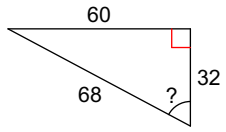
7)



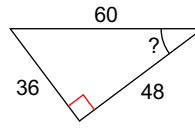
8)



9)



10)



Answers to Finding a Missing Angle Using Trig #2

1) 38°
5) 19°
9) 62°

2) 67°
6) 39°
10) 37°

3) 57°
7) 18°

4) 65°
8) 36°